

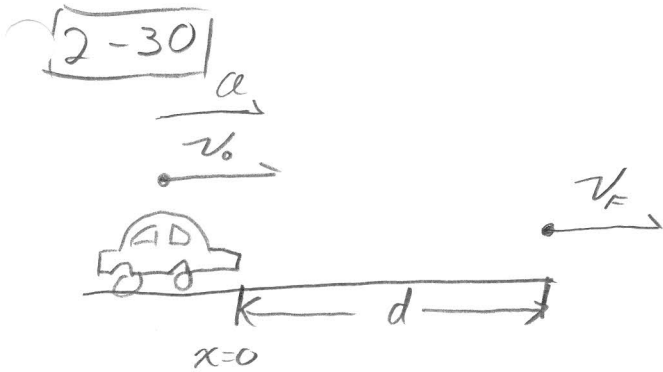
Physics III
Homework

$$v_0 = 70 \text{ km/h}$$

$$t = 65 \cdot \frac{1}{3600} \frac{\text{hr}}{\text{s}} = 1.7 \times 10^{-3} \text{ hr}$$

$$v_F = 80 \text{ km/h}$$

$$d = ?$$



$$x = x_0 + v_0 t + \frac{1}{2} a t^2$$

$$v = v_0 + a t$$

$$\textcircled{1} d = 0 + v_0 t + \frac{1}{2} a t^2$$

$$\textcircled{2} v_F = v_0 + a t$$

Don't know a or d. Problem asks for d so eliminate a.

$$d = 0 + v_0 t + \frac{1}{2} \frac{v_F - v_0}{t} t^2$$

$$a = \frac{v_F - v_0}{t}$$


$$= v_0 t + \frac{1}{2} v_F t - \frac{1}{2} v_0 t = \frac{1}{2} v_F t + \frac{1}{2} v_0 t$$

$$\boxed{d = \frac{1}{2} (v_F + v_0) t}$$

$$d = \frac{1}{2} (80 \text{ km/hr} + 70 \text{ km/hr}) (1.7 \times 10^{-3}) = .128 \text{ km}$$

$$\boxed{d = 128 \text{ m}}$$

Ch2, #59



$$v_0 = 220 \text{ km/hr}$$

$$t = 29 \text{ s}$$

$$d = ?$$

$$x(t) = x_0 + v_0 t + \frac{1}{2} a t^2$$

$$d = 0 + v_0 t - \frac{1}{2} a t^2$$

$$v(t) = v_0 + a t$$

$$0 = v_0 - a t$$


$$\Rightarrow a = \frac{v_0}{t}$$

$$d = v_0 t - \frac{1}{2} \frac{v_0}{t} t^2$$

$$\boxed{d = \frac{1}{2} v_0 t} = \frac{1}{2} (220 \frac{\text{km}}{\text{hr}} \cdot 1000 \frac{\text{m}}{\text{km}} \cdot \frac{1}{3600} \frac{\text{hr}}{\text{s}}) (29 \text{ s})$$

$$\boxed{= 886 \text{ m}}$$

Physics III
Homework



Given

$$a = 6.3 \text{ m/s}^2$$

$$v_f = 18 \frac{\text{km}}{\text{hr}} \cdot \frac{1 \times 10^3 \frac{\text{m}}{\text{km}}}{3600 \frac{\text{s}}{\text{hr}}} = 5 \text{ m/s}$$

$$d = 34 \text{ m}$$

a) Track the car's position:

$$x = x_0 + v_0 t + \frac{1}{2} a t^2$$

$$\textcircled{1} \quad d = 0 + \cancel{v_0 t} - \frac{1}{2} a t^2$$

Don't know v_0 or $t \Rightarrow 1 \text{ eq, } 2 \text{ unk.}$

sign for neg accel.

Track car's velocity:

$$v = v_0 + a t$$

$$\textcircled{2} \quad v_f = \cancel{v_0} - a t$$

Don't know v_0 or t

But now I have 2 eq. and 2 unknowns.

Solve $\textcircled{2}$ for t and plug into $\textcircled{1}$:

$$t = \frac{v_0 - v_f}{a}$$

$$d = 0 + v_0 \frac{(v_0 - v_f)}{a} - \frac{1}{2} a \frac{(v_0 - v_f)^2}{a^2}$$

continued



2-60 continued

continuing algebra...

$$\begin{aligned}d &= \frac{1}{a} \left[v_0(v_0 - v_f) - \frac{1}{2}(v_0 - v_f)^2 \right] \\&= \frac{1}{a} \left[v_0^2 - \cancel{v_0 v_f} - \frac{1}{2}v_0^2 + \cancel{v_0 v_f} - \frac{1}{2}v_f^2 \right] \\&= \frac{1}{a} \left[\frac{1}{2}v_0^2 - \frac{1}{2}v_f^2 \right]\end{aligned}$$

$$\boxed{d = \frac{v_0^2 - v_f^2}{2a}}$$

Solve for v_0 :

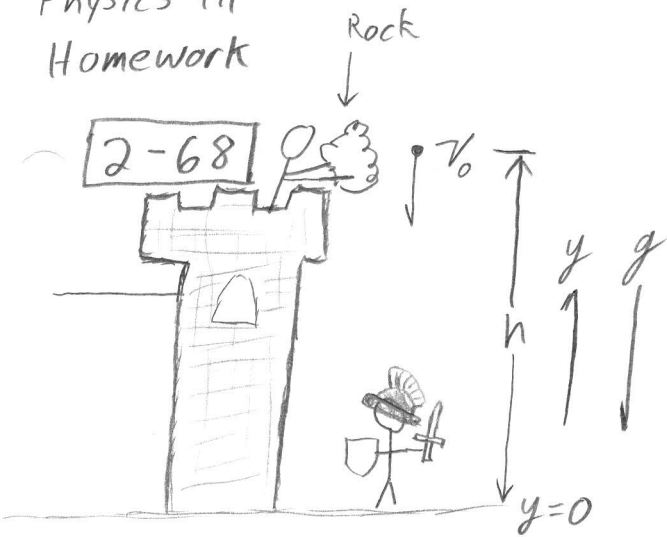
$$\boxed{v_0 = (2ad + v_f^2)^{\frac{1}{2}}}$$

Now plug in numbers. Remember we already put in the sign for neg. acc?

$$\begin{aligned}v_0 &= \left((2)(6.3)(34) + 5^2 \right)^{\frac{1}{2}} = 21.3 \text{ m/s} \cdot \frac{3600 \text{ hr}}{1 \times 10^3 \text{ m/km}} \\&= \boxed{76.7 \text{ km/hr}}\end{aligned}$$

b) From part a $t = \frac{v_0 - v_f}{a} = \frac{21.3 \text{ m/s} - 5 \text{ m/s}}{6.3 \text{ m/s}^2} = \boxed{2.6 \text{ s}}$

Physics III
Homework



$v_0 = 10 \text{ m/s} \Rightarrow \text{sign?}$ $v_1 = \text{thrown}$
 $h = 15 \text{ m}$
 $g = 9.8 \text{ m/s}^2$ $v_2 = \text{Dropped}$

Let's calculate the Final velocity when the rock is thrown.

The problem statement doesn't specify a sign for v_0 ...
Let's leave it positive for now...

Basic kinematics equations:

$$y = y_0 + v_0 t + \frac{1}{2} a t^2$$

$$v = v_0 + a t$$

$$0 = h + v_0 t - \frac{1}{2} g t^2$$

$$v_1 = v_0 - g t$$

$$0 = h + \frac{v_0(v_0 - v_1)}{g} - \frac{1}{2g} \frac{(v_0 - v_1)^2}{g}$$

$$t = \frac{v_0 - v_1}{g}$$

$$= h + \frac{1}{g} \left[v_0^2 - v_0 v_1 - \frac{1}{2} v_0^2 + v_0 v_1 - \frac{1}{2} v_1^2 \right]$$

$$0 = h + \frac{v_0^2 - v_1^2}{2g} \Rightarrow v_1 = (v_0^2 + 2gh)^{1/2} \quad \textcircled{1}$$

continued ↓

Castle defence continued

In eq. ①, the v_0 term is squared. So, it doesn't matter if the rock is thrown up or down, the final velocity, v_1 , is the same.

To find v_2 , we can use eq. ① and set v_0 to zero

$$v_2 = (0 + 2gh)^{\frac{1}{2}} = (2gh)^{\frac{1}{2}}$$

The problem asks for the difference in velocities.

$$v_1 - v_2 = (v_0^2 + 2gh)^{\frac{1}{2}} - (2gh)^{\frac{1}{2}}$$

$$= (10^2 + (2)(9.8)(15))^{\frac{1}{2}} - ((2)(9.8)(15))^{\frac{1}{2}}$$

$$v_1 - v_2 = 1.7 \text{ m/s}$$

Much less than 10 m/s faster...
not worth the effort.